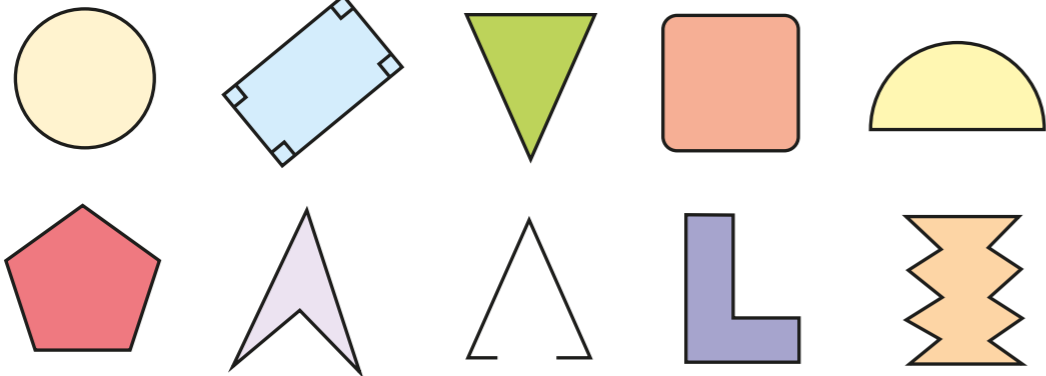


Triangles

1 Here are some shapes.

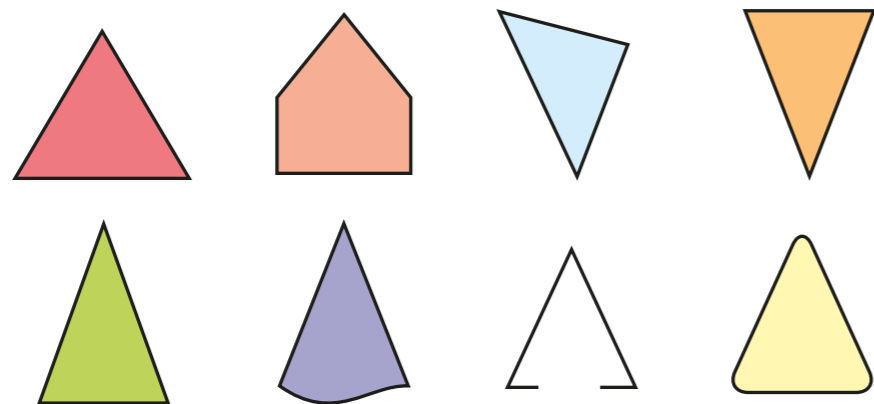


- Tick the polygons.
- Talk to a partner about the shapes you have not ticked. Why are they not polygons?
- Write a definition of a polygon.

Compare your definition with a partner's.




2 Tick the triangles.

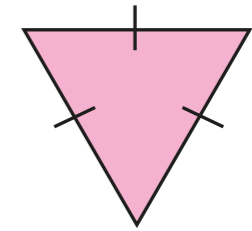


For any shapes you have not ticked, talk to a partner about why somebody might think they are triangles.

3 Ron is classifying triangles.




This is an upside down triangle.



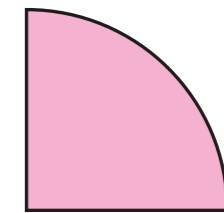
- Ron is incorrect. Explain why.

b) What type of triangle is it? _____

4 Annie is identifying shapes.



This shape has 3 sides, so it is a triangle.



Do you agree with Annie? _____

Explain your answer.

